

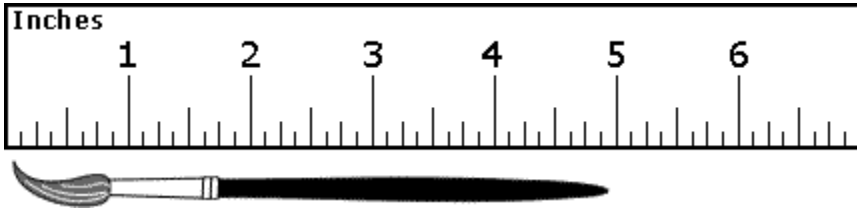
## Gr. 1 U5 Fish Lengths and Animal Jumps Post

Name: \_\_\_\_\_

Date: \_\_\_\_\_

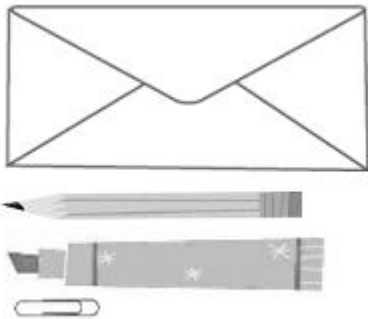
Directions: Read each question carefully. Circle the letter to the BEST answer.

- 1) About how long is the brush?



- A) about 3 inches
  - B) about 4 inches
  - C) about 5 inches
  - D) about 6 inches
- 

- 2) Which object is shortest?



- A) pencil
  - B) marker
  - C) envelope
  - D) paperclip
-

## Gr. 1 U5 Fish Lengths and Animal Jumps Post

3) Which shows the pieces of chalk in order from longest to shortest?



---


4) About how many cubes long is this gluestick?



- A) 1 cube
- B) 4 cubes
- C) 8 cubes
- D) 20 cubes

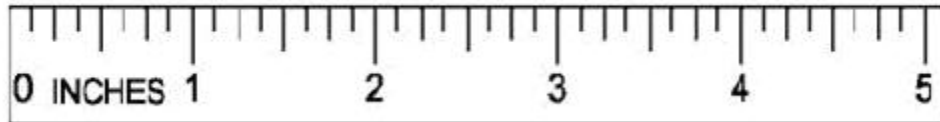
## Gr. 1 U5 Fish Lengths and Animal Jumps Post

5) About how long is this spoon?



- A) about 1 centimeter
  - B) about 6 centimeters
  - C) about 18 centimeters
  - D) about 30 centimeters
- 

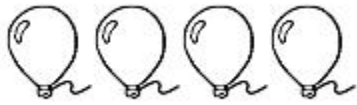
6) How many inches long is this straw?



- A) 0 inches
  - B) 3 inches
  - C) 4 inches
  - D) 5 inches
-

## Gr. 1 U5 Fish Lengths and Animal Jumps Post

7) Which is between 3 and 4 balloons long?



- A) A short pencil, approximately the same length as one of the balloons.
  - B) A pencil of medium length, approximately the same length as two balloons.
  - C) A very short pencil, approximately the same length as half a balloon.
  - D) A long pencil, approximately the same length as four balloons.
- 

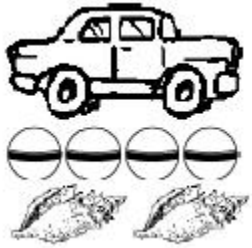
8) How long is the line?



- A) one basketball
  - B) two basketballs
  - C) three basketballs
  - D) four basketballs
-


## Gr. 1 U5 Fish Lengths and Animal Jumps Post

- 9) Tom finds that a toy car is 4 rubber balls long. How long is the car when Carlotta uses shells to measure it?



- A) 1 shell
  - B) 2 shells
  - C) 3 shells
  - D) 4 shells
- 

- 10) The length of the row of bees is between which 2 numbers?



- A) 0 and 1 inch
  - B) 1 and 2 inches
  - C) 2 and 3 inches
  - D) 3 and 4 inches
-

## Gr. 1 U5 Fish Lengths and Animal Jumps Post

**Question 11 and 12 are short answer questions.**

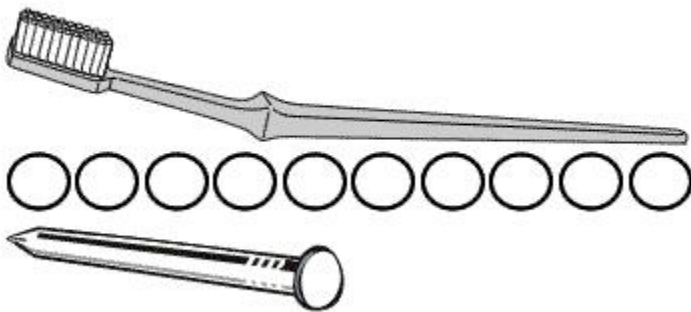
- 11) How many rectangles long is the row of bugs? Finish the sentence.

The bugs are \_\_\_\_\_ rectangles long.



- 12) This toothbrush is about 10 circles long. About how many nails long is the toothbrush? Finish the sentence.

I think that the toothbrush is \_\_\_\_\_ nails long.



## Gr. 1 U5 Fish Lengths and Animal Jumps Post

**Question 13 is an open response question. Answer each part.**

13) A. Measure this fish using a ruler. How long is it? \_\_\_\_\_

B. Sam measured the fish using a ruler. She said it was 4 inches long.

Can Sam be right? **Circle: Yes or No.**

How do you know? Explain in words.



**Question 14 is an Open Response Question. Answer each part.**

14) Would you need more **paperclips** or more **ladybugs** to measure the crayon?

I would need more \_\_\_\_\_.

Why? Explain in words.

